

Smiley Face Math
Grade 1, Worksheet VII

Name: _____

- ☺☺ 1. Alice saw 4 pink flamingos at the zoo. Then she saw a penguin and her baby. Later she saw a parrot. How many birds did she see in all?



Answer: Alice saw _____ birds at the zoo.

- ☺☺ 2. The children below are playing jump rope. One of them had to go home. Then 2 more friends joined the fun. How many were playing jump rope then?



Answer: There were _____ kids playing jump rope at the end.

- ☺ 3. Start with 4 teddy bears. Add 6 more. How many teddy bears do you have?



Answer: $4 + 6 =$ _____

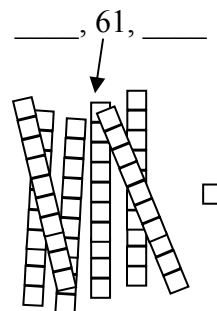
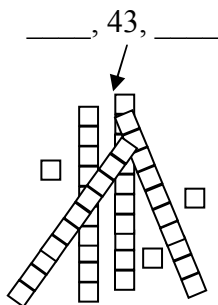
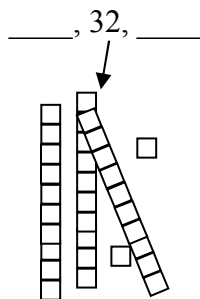
- ☺ 4. Start with 6 teddy bears. Add 4 more. How many teddy bears do you have now?



Answer: $6 + 4 =$ _____

- ☺☺ 5. Does $4 + 6$ give the same answer as $6 + 4$? _____ How do you know? Explain:

☺☺☺ 6. Below, write the numbers that come *just before* and *just after* 32, 43, and 61.



☺☺☺ 7. Nine frogs are in the pond. Three frogs hop away. How many frogs are left? _____




☺☺☺ 8. Draw a boy or a girl this way:

Draw a circle for the head:

Draw a triangle for the body:

Draw rectangles for the arms and legs:



How many shapes did you draw altogether? _____ shapes